

SVARARK

POST 1: SÆT KRYDTS.



POST 2: LØS REGNESTYKKERNE.

$$\text{Cauldron} + \text{Pumpkin} = \underline{\hspace{2cm}}$$

$$\text{Pumpkin} + \text{Spider} = \underline{\hspace{2cm}}$$

$$\text{Spider} + \text{Potion} = \underline{\hspace{2cm}}$$

$$\text{Cauldron} + \text{Potion} = \underline{\hspace{2cm}}$$

POST 3: SÆT STREG.




SVARARK

POST 4: PLUS TALLENE SAMMEN.

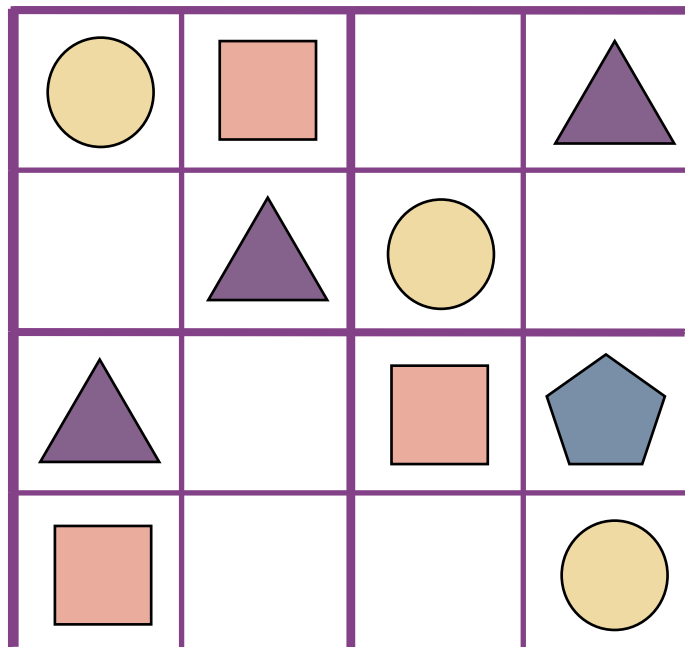
_____ + _____ + _____ + _____ + _____

_____ + _____ + _____ + _____ + _____ = _____

POST 5: SKRIV 4-TABELLEN.



POST 6: LØS SUDOKUEN.



SVARARK

POST 7: FØLG DE LIGE TAL.

↓

2	6	4	8	9	11
7	17	12	5	7	13
12	18	14	13	13	14
16	9	11	10	18	10
20	3	24	18	15	24
22	24	30	33	15	10

↓

POST 8: HVOR MANGE STYKKER SLIK?







_____ + _____ + _____ = _____

SVARARK

POST 9: LØS GÅDEN.



=




=



POST 10: LØS REGNESTYKKERNE.



$$6 - 3 = \square$$



$$4 - 1 = \square$$



$$3 - 2 = \square$$



$$5 - 3 = \square$$